

NAME: _____



Math Words

all together There are 4 in my family
all together.

greater 9 is greater than 3.

count on I can count on from 5
by saying "6, 7, 8."

Starter Problem

Rory has 3 pennies. Lisa has 9 pennies.
How many pennies do they have
all together?

NAME: _____

Starter Problem


Rory has 3 pennies. Lisa has 9 pennies.
How many pennies do they have
all together?

Student Thinking



Brad

I can start with 9 and count on
3 more. 9 and 1 more is 10 cents
and 2 more is 12 cents.



Taylor

I drew 3 pennies and 9 pennies.
I counted 13 pennies in all.



NAME: _____

Things to Remember



Handwriting practice lines consisting of solid top and bottom lines with a dashed middle line. A solid grey rectangular box is located below the first set of lines.



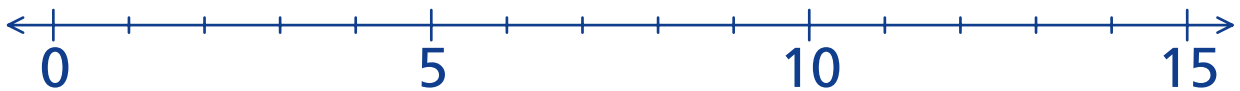
Handwriting practice lines consisting of solid top and bottom lines with a dashed middle line.

NAME: _____

Our Turn

Count on from the greater number to add.
You may use the number line.

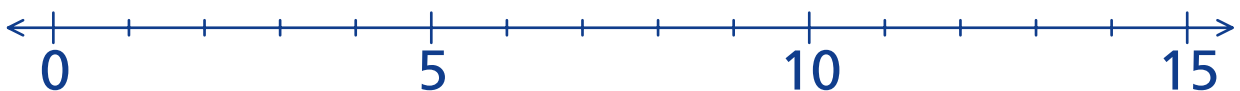
1. Jan has 3 cat toys and 8 dog toys. How many toys does she have all together? _____



2. Jorge read 9 books. Then he read 2 more. How many books did he read? _____



3. Lee drew 2 trucks. Then he drew 6 cars. How many things did he draw all together? _____

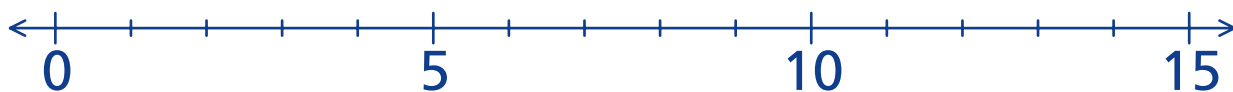


NAME: _____

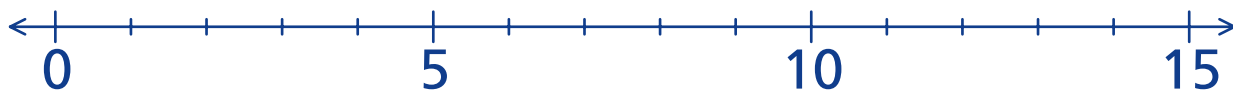
My Turn

Count on from the greater number to add.
You may use the number line.

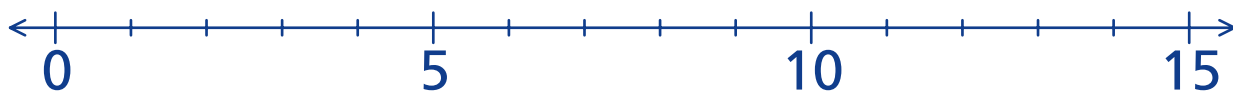
1. Jin saved 1 box top. Then he saved 8 more.
How many box tops does he have? _____



2. Kayla planted 9 sunflower seeds on Sunday. Then she planted 4 corn seeds.
How many seeds did she plant? _____



3. There are 2 kittens playing and 7 kittens sleeping. How many are there in all? _____



NAME: _____

Mini Lesson

Fill in the circle next to the answer you choose.

1. Greg made 8 clay snakes and 4 clay bugs.
How many things did he make all together?

☐ 8☐ 12☐ 11

2. There were 5 children in the play yard.
Then 8 more children came. How many
children are there in all?

☐ 10☐ 12☐ 13